

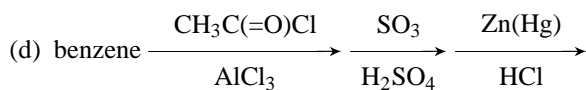
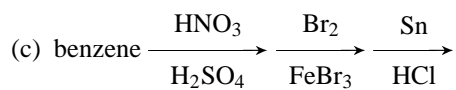
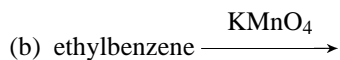
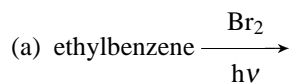
H				He
C	N	O	F	Ne
Si	P	S	Cl	Ar

Name: _____

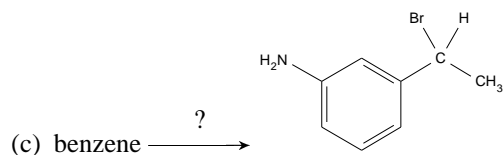
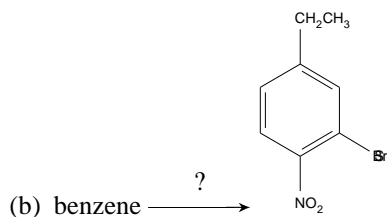
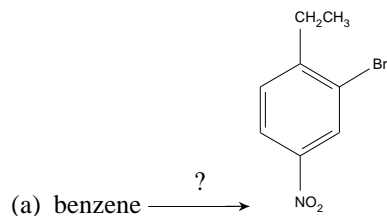
CHEM 20482 - Basic Organic Chemistry II - Spring 2009

Quiz #2 - 0 Points

1. Draw the structure of the major product expected from the following reactions.

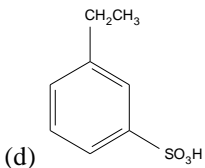
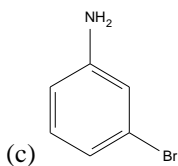
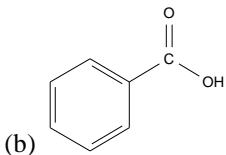
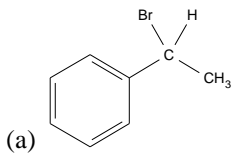


2. Propose a reasonable synthetic route for the synthesis of each of the following molecules from benzene.



CHEM 20482 - Basic Organic Chemistry II - Spring 2009 Quiz #2 Key

1. Products



2. Synthesis

