

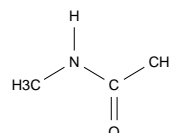
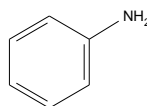
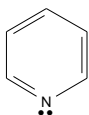
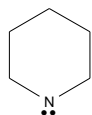
H				He
C	N	O	F	Ne
Si	P	S	Cl	Ar

Name: _____

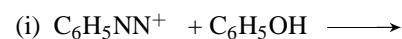
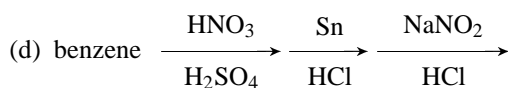
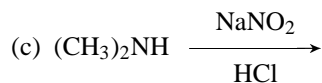
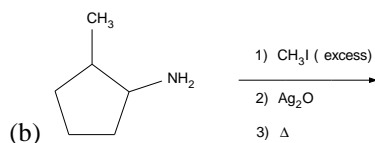
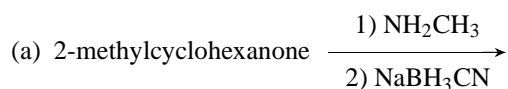
CHEM 20482 - Basic Organic Chemistry II - Spring 2009

Quiz #7 - 0 Points

1. Rank the following amines from 1=least basic to 4=most basic.



2. Draw the structure of the major organic product expected from each of the following chemical reactions.



CHEM 20482 - Basic Organic Chemistry II - Spring 2009 Quiz #6 Key

1. Basicity: From left to right is 4 (most basic), 3, 2, 1 (least basic).

2. Reactions.

